

Lattice Fractions

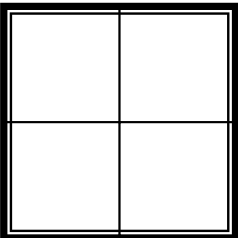
Name _____

Date _____ Period _____

Find the sum, difference, product, and quotient of each pair of fractions.

1

×



÷

Sum: _____

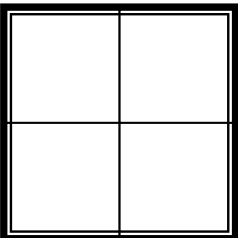
Product: _____

Difference: _____

Quotient: _____

2

×



÷

Sum: _____

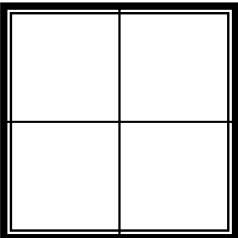
Product: _____

Difference: _____

Quotient: _____

3

×



÷

Sum: _____

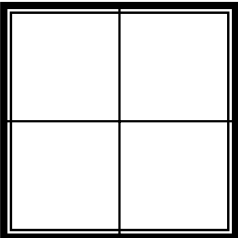
Product: _____

Difference: _____

Quotient: _____

4

×



÷

Sum: _____

Product: _____

Difference: _____

Quotient: _____